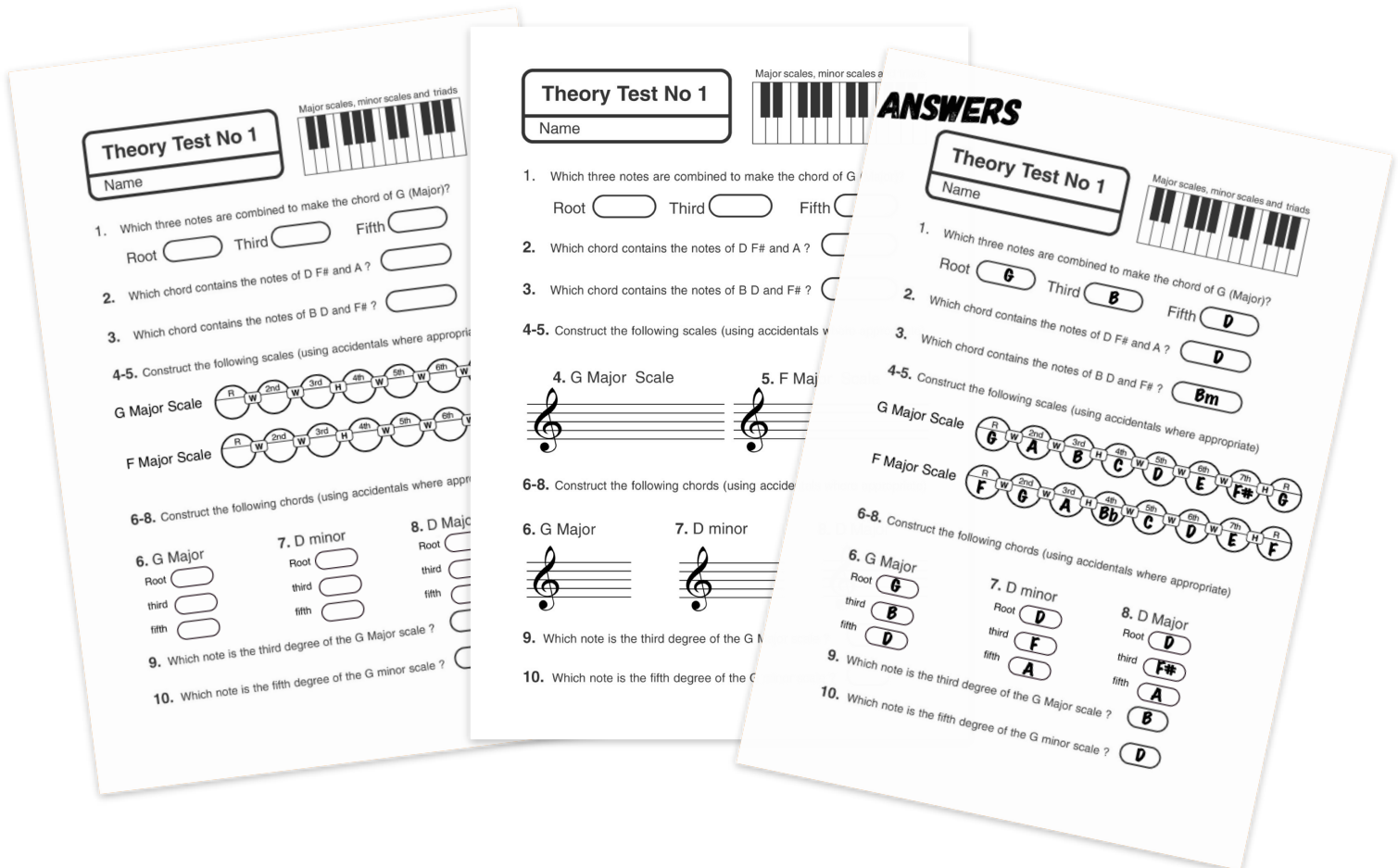


# TWO VERSIONS OF THE TEST AND AN ANSWER SHEET

This PDF contains two versions of Music Theory Test no 1  
All of our theory tests come in both notation and "letter name only" formats so teachers can cater for students with differing levels of prior learning or practical experience

Answer sheets (like the one in this download) are provided for all theory tests.

These resources can be combined with the Music Theory "Explainers" and worksheets to make up effective distance learning materials



# Theory Test No 1

Name

Major scales, minor scales and triads



1. Which three notes are combined to make the chord of G (Major)?

Root  Third  Fifth

2. Which chord contains the notes of D F# and A ?

3. Which chord contains the notes of B D and F# ?

- 4-5. Construct the following scales (using accidentals where appropriate)

G Major Scale

F Major Scale

- 6-8. Construct the following chords (using accidentals where appropriate)

## 6. G Major

Root

third

fifth

## 7. D minor

Root

third

fifth

## 8. D Major

Root

third

fifth

9. Which note is the third degree of the G Major scale ?

10. Which note is the fifth degree of the G minor scale ?

# Theory Test No 1

Name \_\_\_\_\_

Major scales, minor scales and triads



1. Which three notes are combined to make the chord of G (Major)?

Root

Third


Fifth

2. Which chord contains the notes of D F# and A ?


3. Which chord contains the notes of B D and F# ?

- 4-5. Construct the following scales (using accidentals where appropriate)

## 4. G Major Scale



## 5. F Major Scale



- 6-8. Construct the following chords (using accidentals where appropriate)

## 6. G Major



## 7. D minor



## 8. D Major



9. Which note is the third degree of the G Major scale ?

10. Which note is the fifth degree of the G minor scale ?

# ANSWERS

## Theory Test No 1

Name \_\_\_\_\_

Major scales, minor scales and triads



1. Which three notes are combined to make the chord of G (Major)?

Root **G** Third **B** Fifth **D**

2. Which chord contains the notes of D F# and A ? **D**

3. Which chord contains the notes of B D and F# ? **Bm**

4-5. Construct the following scales (using accidentals where appropriate)

G Major Scale

R		2nd		3rd		4th		5th		6th		7th		R
G	W	A	W	B	H	C	W	D	W	E	W	F#	H	G

F Major Scale

R		2nd		3rd		4th		5th		6th		7th		R
F	W	G	W	A	H	Bb	W	C	W	D	W	E	H	F

6-8. Construct the following chords (using accidentals where appropriate)

6. G Major

Root **G**

third **B**

fifth **D**

7. D minor

Root **D**

third **F**

fifth **A**

8. D Major

Root **D**

third **F#**

fifth **A**

9. Which note is the third degree of the G Major scale ? **B**

10. Which note is the fifth degree of the G minor scale ? **D**