

ANSWER SHEETS

FOR NOTE NAMING

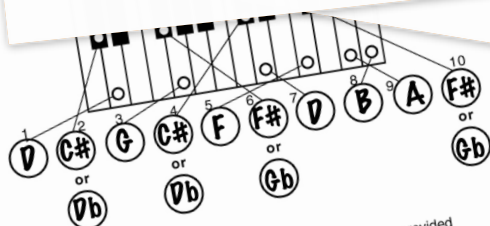
WHOLE AND HALF-STEP INTERVALS

MAJOR SCALES

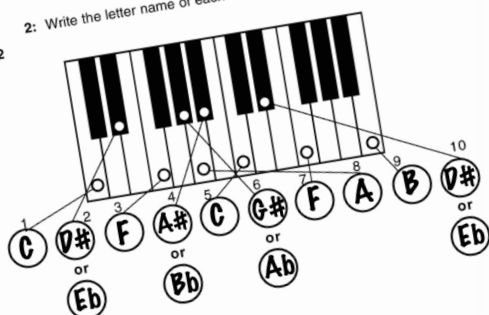
TRIADS

DIATONIC CHORDS

musicteachingresources.com



Q: 2 Write the letter name of each note in the circles provided



Answer Sheet

1: a What is the name of the note a half step above the one that you have identified? C

1: b What could be the name of the note a half step below the one that you have identified? either A# or Bb

2: a What could be the name of the note a half step above the one that you have identified? either G# or Ab

2: b What could be the name of the note a half step below the one that you have identified? either F# or Gb

a What is the name of the note a half step above the one that you have identified? A

What is the name of the note a half step below the one that you have identified? G

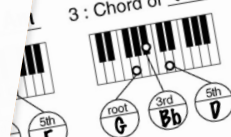
What could be the name of the note a half step above the one that you have identified? either C# or D

What is the name of the note a half step below the one that you have identified? either D# or Eb

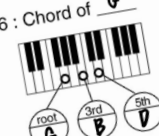
Answer Sheet

1: a What is the name of the chord in the circles provided and then answer the questions to the right

3: Chord of Gm



6: Chord of G



9: Chord of Dm

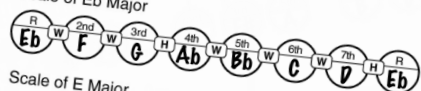


Answer Sheet

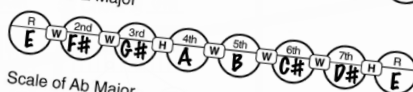
Constructing Major Scales



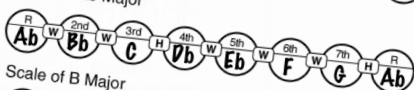
Scale of Eb Major



Scale of E Major



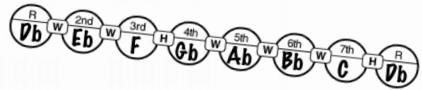
Scale of Ab Major



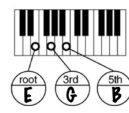
Scale of B Major



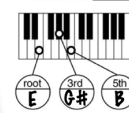
Scale of Db Major



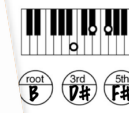
4: Chord of Em



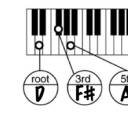
7: Chord of E



10: Chord of B



11: Chord of B



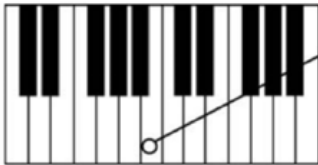
There is a 26 page document in the download that contains answer sheets (like the ones above) for all of the “early stages” worksheets covering the topics shown

Half Step Intervals 1

Answer Sheet

Write the name of the note in the circles provided and then answer the questions to the right

Q: 1



1:a What is the name of the note a half step above the one that you have identified? C

1:b What could be the name of the note a half step below the one that you have identified? either A# or Bb

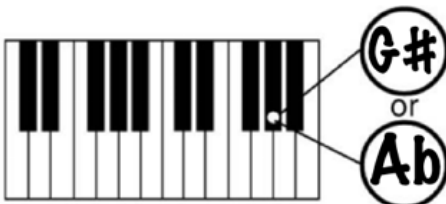
Q: 2



2:a What could be the name of the note a half step above the one that you have identified? either G# or Ab

2:b What could be the name of the note a half step below the one that you have identified? either F# or Gb

Q: 3



3:a What is the name of the note a half step above the one that you have identified? A

3:b What is the name of the note a half step below the one that you have identified? G

Q: 4



4:a What could be the name of the note a half step above the one that you have identified? either C# or Db

4:b What is the name of the note a half step below the one that you have identified? B

Q: 5



5:a What could be the name of the note a half step above the one that you have identified? either D# or Eb

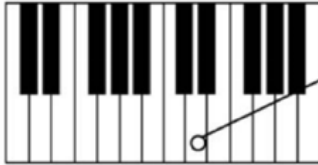
5:b What could be the name of the note a half step below the one that you have identified? either C# or Db

Whole Step Intervals 1

Answer Sheet

Write the name of the note in the circles provided and then answer the questions to the right

Q: 1



1:a What is the name of the note a whole step above the one that you have identified? D

1:b What is the name of the note a whole step below the one that you have identified? C

Q: 2



2:a What is the name of the note a whole step above the one that you have identified? E

2:b What is the name of the note a whole step below the one that you have identified? D

Q: 3



3:a What is the name of the note a whole step above the one that you have identified? F

3:b What is the name of the note a whole step below the one that you have identified? E

Q: 4



4:a What is the name of the note a whole step above the one that you have identified? G

4:b What could be the name of the note a whole step below the one that you have identified? either F# or Eb

Q: 5



5:a What is the name of the note a whole step above the one that you have identified? A

5:b What could be the name of the note a whole step below the one that you have identified? either G# or Fb